

Moon Dust Rush



I collected 30 bags of moon dust.

Blob




I collected 28 bags of moon dust.

Flib



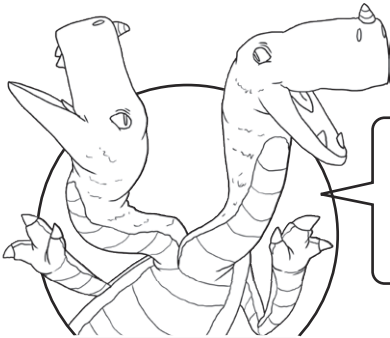
I collected $\frac{2}{3}$ the number of bags that Blob collected.

Zik



I collected $\frac{3}{4}$ the number of bags that Flib collected.

Ix



I collected $\frac{2}{7}$ the number of bags that Flib collected.

Tuffy



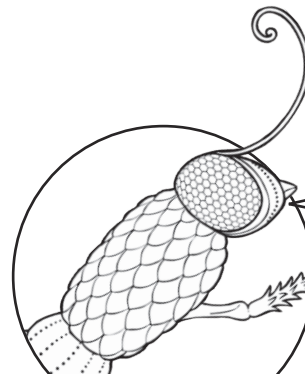
I collected $\frac{3}{5}$ the number of bags that Zik collected.

Nab



I collected $\frac{5}{6}$ the number of bags that Blob collected.

Dox

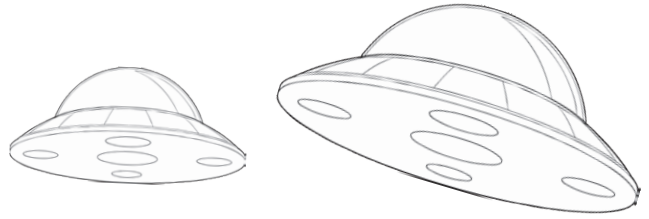


I collected $\frac{2}{3}$ the number of bags that Ix collected.

Nebe

Moon Dust Rush

Use the fraction bars to help you find the answers.



30

28

20

28

30

21

Moon Dust Rush Answers

Question	Answer
1. Question 1; numbers written in manually.	
Zik	20 bags
Ix	21 bags
Nab	12 bags
Tuffy	8 bags
Dox	25 bags
Nebe	14 bags

Meteor Toss



I threw the meteor
60 metres.

Blob



I threw the meteor
100 metres

Flib



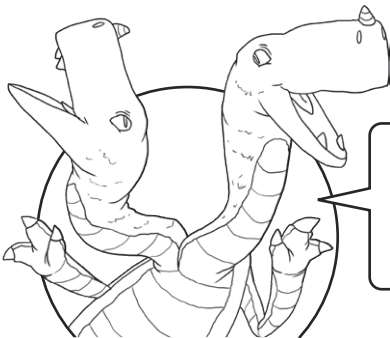
I threw the meteor
 $\frac{2}{3}$ the distance
that Blob did.

Zik



I threw the meteor
 $\frac{3}{4}$ the distance
that Flib did.

Ix



I threw the meteor
 $\frac{3}{5}$ the distance
that Zik did.

Tuffy



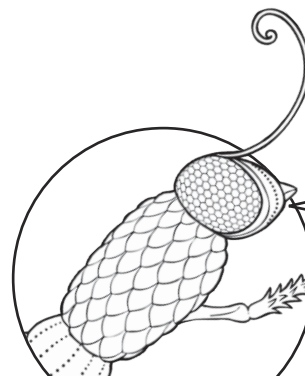
I threw the meteor
 $\frac{7}{10}$ the distance
that Flib did.

Nab



I threw the meteor
 $\frac{5}{6}$ the distance
that Blob did.

Dox



I threw the meteor
 $\frac{2}{3}$ the distance
that Ix did.

Nebe

Meteor Toss

Use the fraction bars to help you find the answers.



Meteor Toss Answers

Question	Answer
1. Question 1; numbers written in manually.	
Zik	40 metres
Ix	75 metres
Nab	24 metres
Tuffy	70 metres
Dox	50 metres
Nebe	50 metres

Rocket Boots High Jump



I jumped 120 metres into the air.

Blob




I jumped 200 metres into the air

Flib



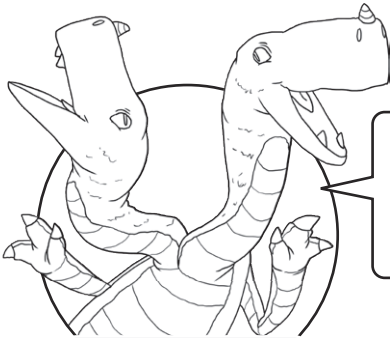
I jumped $\frac{2}{3}$ the height that Blob jumped.

Zik



I jumped $\frac{3}{4}$ the height that Flib jumped.

Ix



I jumped $\frac{3}{10}$ the height that Blob jumped.

Tuffy



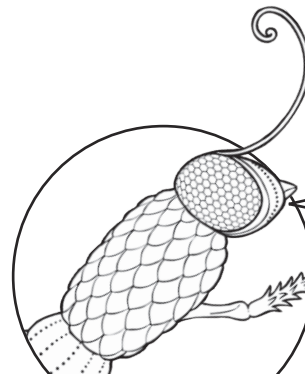
I jumped $\frac{7}{10}$ the height that Flib jumped.

Nab



I jumped $\frac{5}{8}$ the height that Zik jumped.

Dox



I jumped $\frac{2}{3}$ the height that Ix jumped.

Nebe

Rocket Boots High Jump

Use the fraction bars to help you find the answers.



Roket Boots High Jump **Answers**

Question	Answer
1. Question 1; numbers written in manually.	
Zik	80 metres
Ix	150 metres
Nab	36 metres
Tuffy	140 metres
Dox	50 metres
Nebe	100 metres